


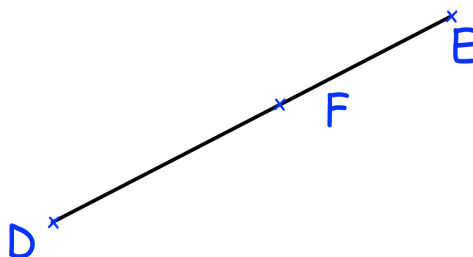
Workout

*There is a template for each question at the end of this exercise if preferred.

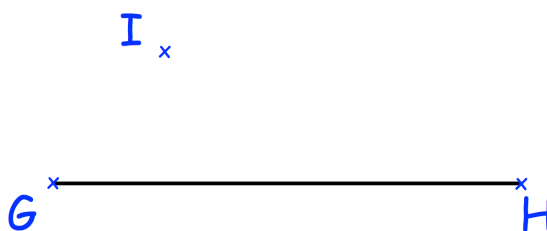
- Question 1: (a) Sketch the diagram below.
(b) Using a ruler and compasses, construct the perpendicular to AB that passes through the point C.



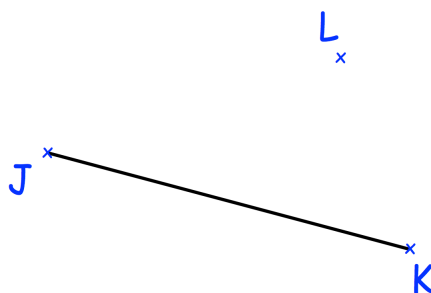
- Question 2: (a) Sketch the diagram below.
(b) Using a ruler and compasses, construct the perpendicular to DE that passes through the point F.



- Question 3: (a) Sketch the diagram below.
(b) Using a ruler and compasses, construct the perpendicular from the line GH to the point I.




- Question 4: (a) Sketch the diagram below.
(b) Using a ruler and compasses, construct the perpendicular from the line JK to the point L.

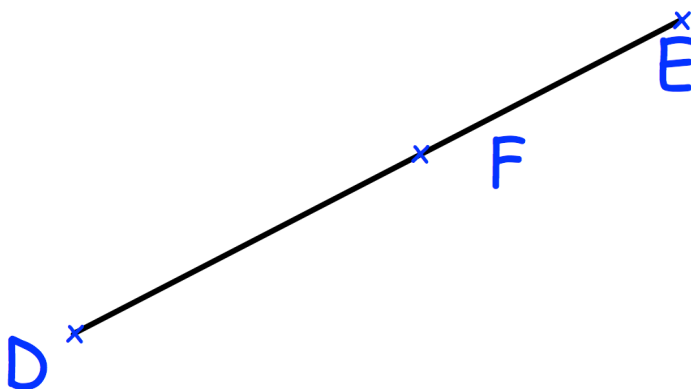


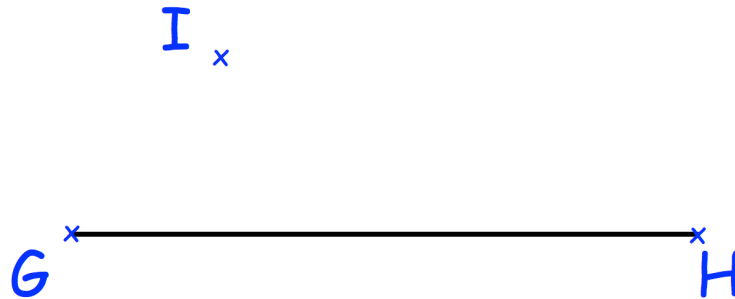
Templates

Question 1:



Question 2:





Question 4:

