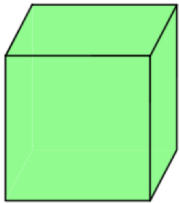


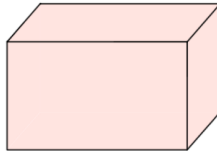
Workout

Question 1: For each 3D shape below, write down how many edges, faces and vertices it has.

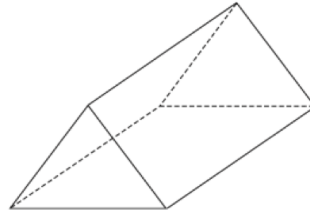
(a)



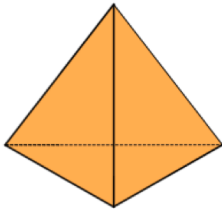
(b)



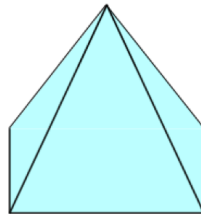
(c)



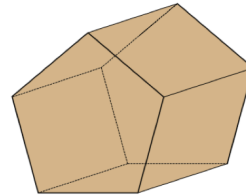
(d)



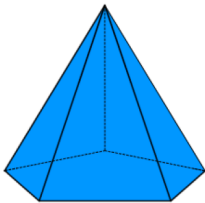
(e)



(f)



(g)



Apply

Question 1: Can you spot any mistakes in the question below?

	Faces	Edges	Vertices
Cube	12	6	8
Square-based Pyramid	5	5	5
Triangular Prism	9	9	6